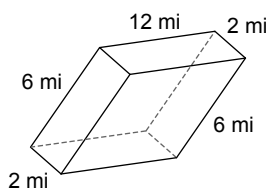


Assignment

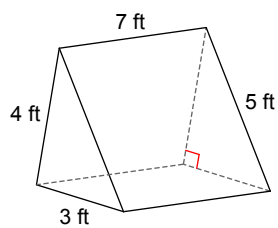
Date _____ Period _____

Find the surface area of each figure by drawing the net. Show all of your work. Answers are attached, if you don't get the correct answer, go back and try to find your mistake.

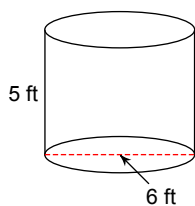
1)



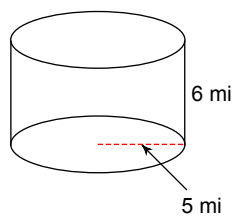
2)



3)



4)



Answers to Assignment (ID: 1)

1) 216 mi²

2) 96 ft²

3) 150.8 ft²

4) 345.6 mi²